



Decimal Decathlon



Activity Sheet

Name: _____


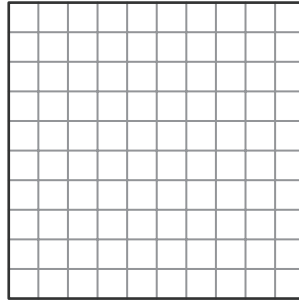
Class: _____

Use the decimal grid to help you add the decimals.

1 $0.14 + 0.72 =$ _____



2 $0.91 + 0.37 =$ _____



Find each sum.
Show your work.

3 $6.2 + 8.4 =$ _____

4 $5.34 + 1.68 =$ _____

5 $3.25 + 4.65 =$ _____

6 $6.71 + 2.2 =$ _____

7 $4.2 + 5.13 =$ _____

8 $4.68 + 5.8 =$ _____

